

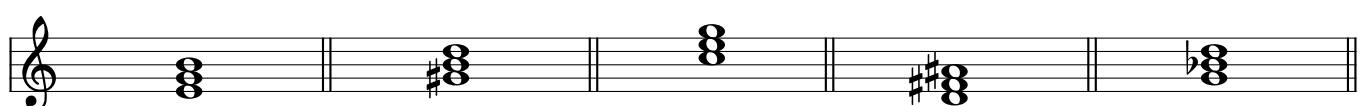
Chord Symbols

Name: _____


PART 1

Write the chord symbol for each triad.

① _____ ② _____ ③ _____ ④ _____ ⑤ _____




⑥ _____ ⑦ _____ ⑧ _____ ⑨ _____ ⑩ _____




PART 2

Spell the triad indicated by each chord symbol.

⑪ B \flat ⑫ F \sharp m ⑬ D \flat + ⑭ A ⑮ Cm



⑯ F \sharp o ⑰ E+ ⑱ B ⑲ F ⑳ E \flat o




Chord Symbols

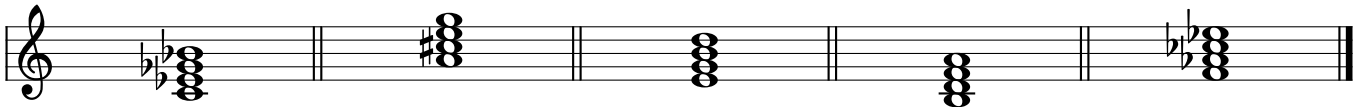
PART 3

Write the chord symbol for each seventh chord.

21 _____ 22 _____ 23 _____ 24 _____ 25 _____




26 _____ 27 _____ 28 _____ 29 _____ 30 _____




PART 4

Spell the seventh chord indicated by each chord symbol.

31 D \emptyset 7 32 B7 33 Em7 34 G \emptyset 7 35 Amaj7



36 G#m7 37 C# \emptyset 7 38 B \emptyset 7 39 Fmaj7 40 E \flat 7



Chord Symbols

PART 5

Write the chord symbol for each triad or seventh chord.

④① _____ ④② _____ ④③ _____ ④④ _____ ④⑤ _____

Musical notation for exercises 41-45. Each exercise consists of a grand staff (treble and bass clefs) with a triad or seventh chord. Exercise 41: Treble clef has F#4 and G4, bass clef has F3 and G3. Exercise 42: Treble clef has G4 and A4, bass clef has G3 and A3. Exercise 43: Treble clef has A4 and B4, bass clef has A3 and B3. Exercise 44: Treble clef has B4 and C5, bass clef has B3 and C4. Exercise 45: Treble clef has C5 and D5, bass clef has C4 and D4.

④⑥ _____ ④⑦ _____ ④⑧ _____ ④⑨ _____ ④⑩ _____

Musical notation for exercises 46-50. Each exercise consists of a grand staff (treble and bass clefs) with a triad or seventh chord. Exercise 46: Treble clef has G4 and A4, bass clef has F#3 and G3. Exercise 47: Treble clef has A4 and B4, bass clef has G#3 and A3. Exercise 48: Treble clef has B4 and C5, bass clef has A3 and B3. Exercise 49: Treble clef has C5 and D5, bass clef has B3 and C4. Exercise 50: Treble clef has D5 and E5, bass clef has C#3 and D3.